

Calcul

Calcule.

$4 \times 8 =$

$4 \times 10$

$4 \times 7 =$

Numération


Écris le nombre : 37 dizaines et 28 unités.

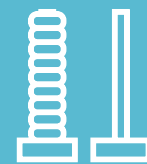
Calcul

Pose ces soustractions en colonne et calcule.

$458 - 351$





$678 - 432$






## Calcul

Combien y a-t-il d'argent ?



$$\underline{\quad} \times \underline{\quad} = \underline{\quad}$$



## Numération

Décompose les nombres.

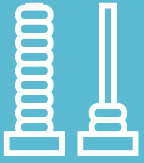
$$300 = 3 \times 100$$

$$400 =$$

$$600 =$$

$$200 =$$





Calcul

Calcule.

$9 \times 100 = \underline{\quad}$

$4 \times 100 = \underline{\quad}$

$7 \times 10 = \underline{\quad}$

Numération

Représente le nombre **904**.Tu as **32** cartes de 1Tu as **10** cartes de 10Tu as **7** cartes de 100