

Calcul

Calcule.

$4 \times 5 =$

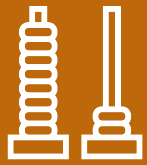
$2 \times 5 =$

$6 \times 5 =$

Numération






Écris les nombres de 499 à 579.





Calcul

Combien y a-t-il d'œufs ?



$$\underline{\quad} \times \underline{\quad} = \underline{\quad}$$


Numération

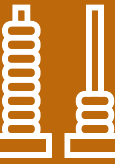
Décompose les nombres.

$$124 = 100 + 20 + 4$$

$$567 =$$

$$672 =$$





Calcul

Calcule.

$4 \times 5 =$

$7 \times 5 =$

$9 \times 5 =$

Problème

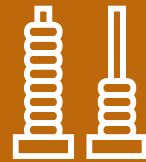
Robotine achète 5 boîtes de gâteaux.

Dans chaque boîte, il y a 6 gâteaux.

Combien de gâteaux a Robotine ?



--	--	--	--	--	--	--	--	--	--	--	--	--	--	--	--	--	--	--	--



Calcul

Calcule.

$10 \times 5 = \underline{\quad}$

$0 \times 5 = \underline{\quad}$

$1 \times 5 = \underline{\quad}$

Numération

Représente le nombre **403**.Tu as **13** cartes de 1Tu as **50** cartes de 10Tu as **3** cartes de 100