

Numération

Ecris les nombres juste avant et juste après.

147

198

115

Calcul

$56 + 24 =$

$100 + 69 =$

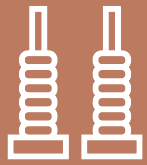
$20 + 175 =$

$70 + 30 =$

Numération

Tu as 60 cartes de 1 et 12 cartes de 10 .
Représente le nombre 156.





Numération

$6u \ 7d \ 1c =$

$2d \ 1c \ 3d =$

$19 \ d =$

$194 \ u =$

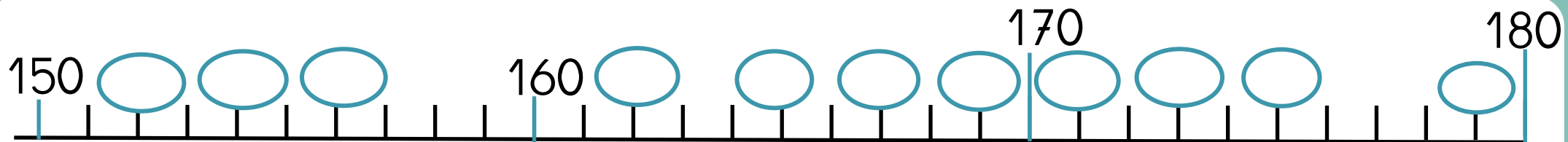
Calcul

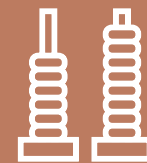
Le double de 50 :

Le double de 45 :

Numération



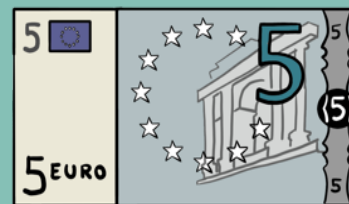
Place les nombres : 154 , 162, 169, 171, 175, 179





Numération

Combien d'argent ont les robots ?



D	U

__ euros