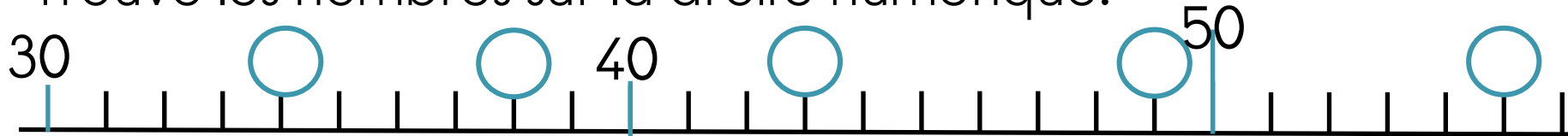


Numération

Trouve les nombres sur la droite numérique.



Calcul

$19+4 =$

$16+5 =$

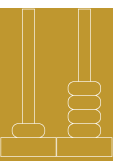
$10+6 =$

$19-4 =$

$17-5 =$

Problème







Tirobot ramasse 15 pommes rouges et 12 pommes jaunes.
Combien a t-il ramassé de pommes ?



Numération

D	U

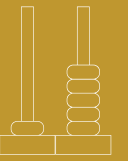
Combien de boutons y a-t-il ?



Il y a boutons.

Il y a dizaines

et..... unités.



Numération

Tu as 50 cartes de 1 et 3 cartes de 10 .
Représente le nombre 62

Calcul

$14 + ? = 19$


$12 + ? = 15$

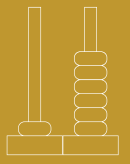
$10 + ? = 17$

$19 + ? = 24$

Problème

Robotine a 40 points. Elle en perd 20.
Combien de points a t-elle maintenant ?





Numération

$6d \ 5u =$

$6u \ 5d =$

$68 \ u =$

$5d =$

Calcul

$12 - ? = 12$

$12 - ? = 10$

$19 - ? = 16$

$18 - ? = 12$

Numération

Ecris les nombres de 50 à 69.

