


Ce polygone est un ...



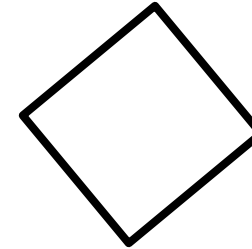
un	un	un
triangle	carré	rectangle

Ce polygone est un ...



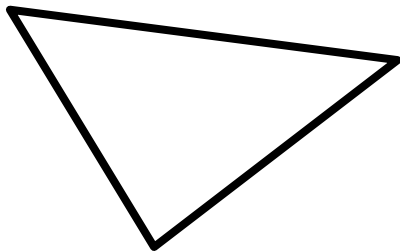

un	un	un
triangle	carré	rectangle

Ce polygone est un ...



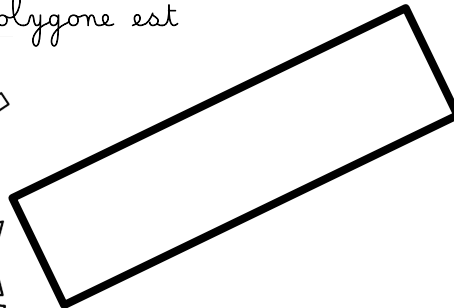

un	un	un
triangle	carré	rectangle

Ce polygone est un ...





un	un	un
triangle	carré	rectangle

Ce polygone est



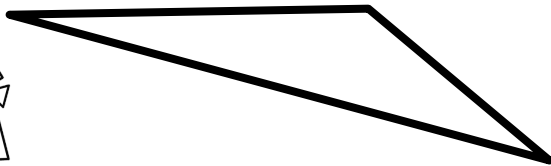
un	un	un
triangle	carré	rectangle

Ce polygone est un ...





un	un	un
triangle	carré	rectangle

Ce polygone est un ...




un	un	un
triangle	carré	rectangle

Ce polygone est un ...





un	un	un
triangle	carré	rectangle

Ce polygone est un ...




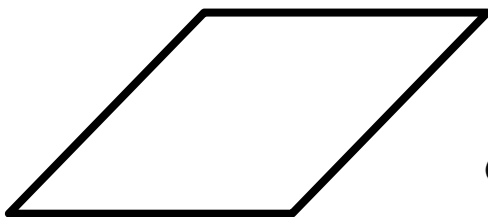
un	un	un
triangle	carré	rectangle

Combien de cotes ?





1 2 3 4 5

Combien de cotes ?



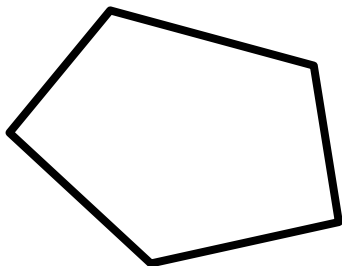

0 1 2 3 4

Combien de cotes ?



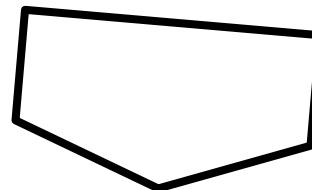

10 11 12 13 14

Combien de cotes ?



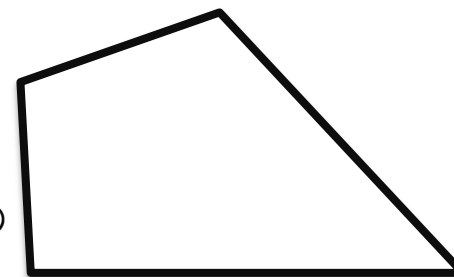

1 2 3 4 5

Combien de cotes ?



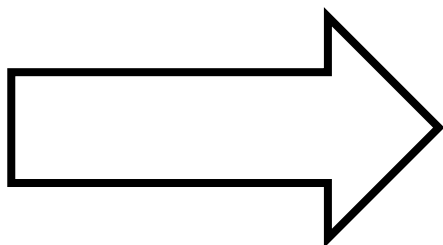

1 2 3 4 5

Combien de cotes ?





0 1 2 3 4

Combien de cotes ?





4 5 6 7 8

Combien de cotes ?



0 1 2 3 4


Combien de cotes ?




0 1 2 3 4

Les

polygones

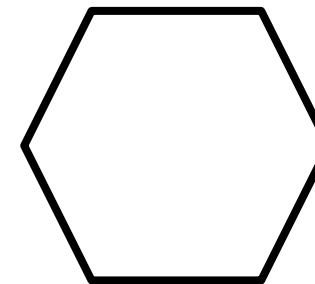



Combien de sommets ?



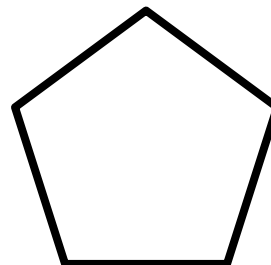

5 6 7 8 9

Combien



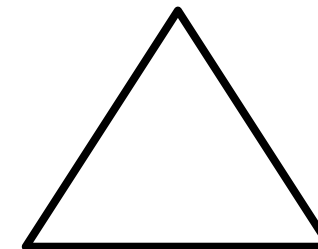

4 5 6 7 8

Combien de sommets ?





1 2 3 4 5

Combien de sommets ?



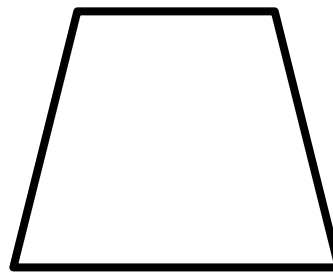

0 1 2 3 4

Combien de sommets ?




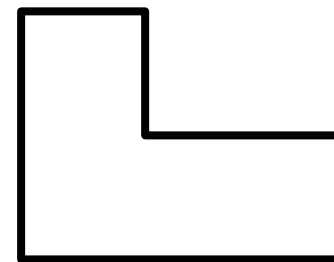
0 1 2 3 4

Combien de sommets ?



0 1 2 3 4

Combien de sommets ?



5 6 7 8 9